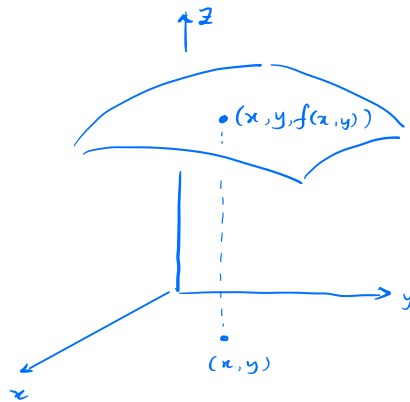


12.1 Intro to Multivariable Functions

Def The graph of a function $f(x,y)$ of two variables is the set of points (x,y,z) where $z = f(x,y)$.



Graphs are surfaces in \mathbb{R}^3

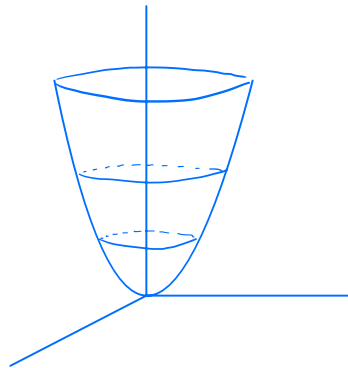
The domain of such a function is a subset D of \mathbb{R}^2 (2 inputs) and its range is a subset of \mathbb{R} (1 output).

Example $f(x,y) =$ elevation at coordinate (x,y)
in mountainous region, graph is 3d surface plot of region

Example $f(x, y) = x^2 + y^2$

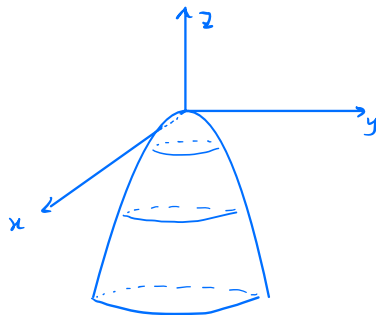
Domain = \mathbb{R}^2 Range = $[0, \infty)$ (non-negative outputs)

Plot :

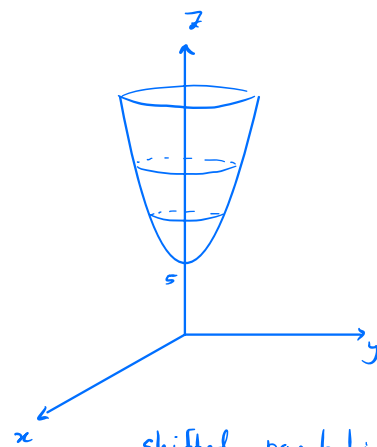


graph of $f(x, y) = x^2 + y^2$
called a paraboloid.

Example Plot the graphs of $g(x, y) = -x^2 - y^2$
and $h(x, y) = 5 + x^2 + y^2$.

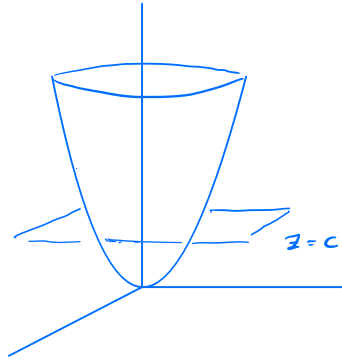


upside down paraboloid
range = $(-\infty, 0]$



shifted paraboloid.
range = $[5, \infty)$

Question What is the intersection between the plane $z=c$ and the graph of $f(x,y)=x^2+y^2$?

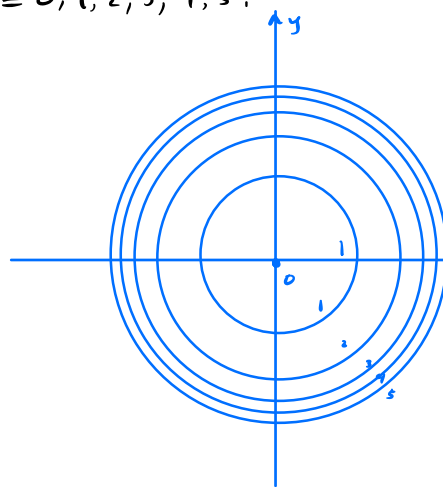


$$\begin{cases} z=c \\ z=x^2+y^2 \end{cases} \Rightarrow x^2+y^2=c, \text{ a circle of radius } \sqrt{c}$$

Def The level curves of a function $f(x,y)$ are curves in \mathbb{R}^2 (the xy -plane) of the form $c=f(x,y)$. A contour plot is a plot in xy -plane that contains multiple level curves.

Example Make contour plot of $f(x,y)=x^2+y^2$ using $c=0,1,2,3,4,5$.

c	radius
0	0
1	1
2	$\sqrt{2} \approx 1.4$
3	$\sqrt{3} \approx 1.73$
4	2
5	$\sqrt{5} \approx 2.23$

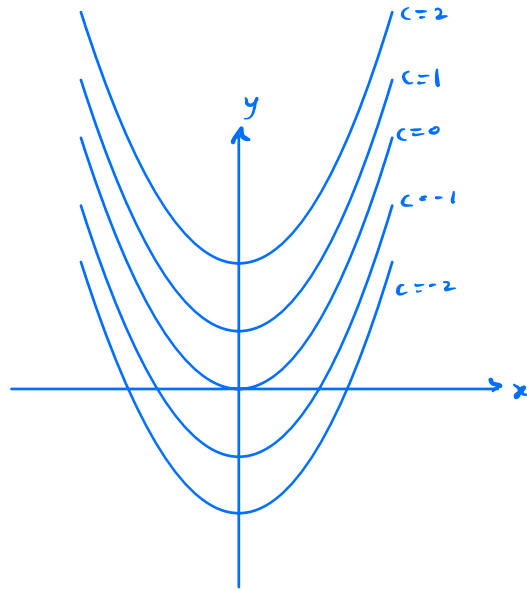


contour plot is like a topographical map showing elevations

Example Make a contour plot of $f(x,y) = y - x^2$

for $c = -2, -1, 0, 1, 2$. Notice the level curves are of the form $c = y - x^2$ or $y = x^2 + c$.

c	equation
-2	$y = x^2 - 2$
-1	$y = x^2 - 1$
0	$y = x^2$
1	$y = x^2 + 1$
2	$y = x^2 + 2$

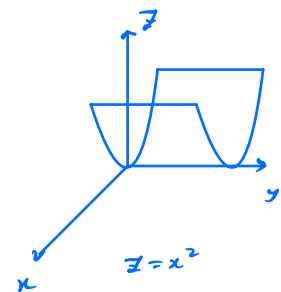
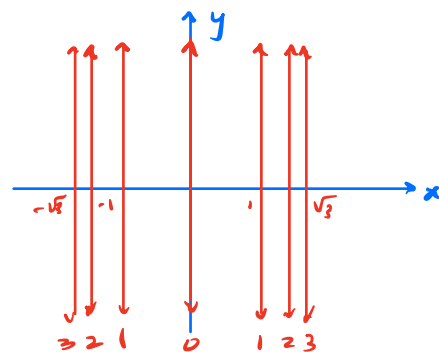


Example Make a contour plot of $f(x,y) = x^2$

for $c = 0, 1, 2, 3$. Here level curves are of the

form $x^2 = c$ or $x = \pm\sqrt{c}$, which are pairs of vertical lines.

c	lines
0	$x = 0$
1	$x = \pm 1$
2	$x = \pm\sqrt{2}$
3	$x = \pm\sqrt{3}$

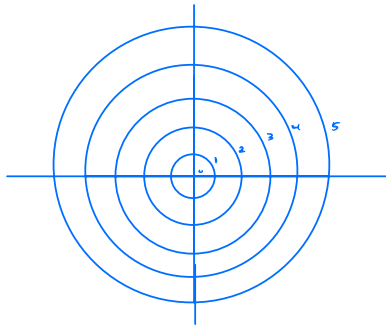


Problem 1. Consider the function $f(x, y) = \sqrt{x^2 + y^2}$.

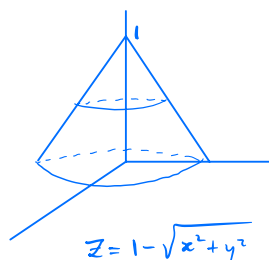
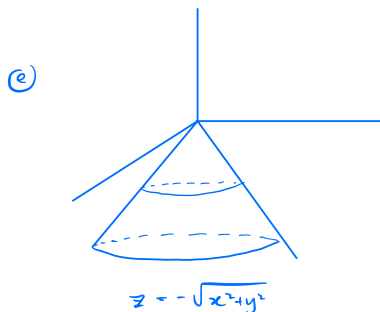
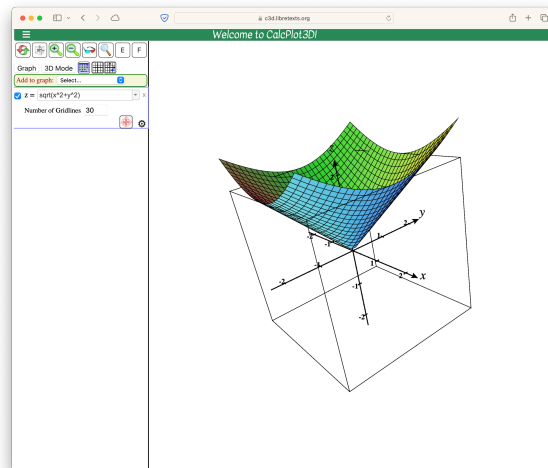
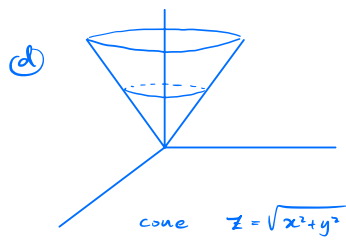
- What are the domain and range of f ?
- Make a contour plot of the level curves of f using $c = 0, 1, 2, 3, 4, 5$.
- What is different about this contour plot compared to that of $g(x, y) = x^2 + y^2$?
- Use CalcPlot3D to make a sketch of the graph of f .
- Sketch the graphs of $h(x, y) = -\sqrt{x^2 + y^2}$ and $k(x, y) = 1 - \sqrt{x^2 + y^2}$.

a) domain = \mathbb{R}^2 , range = $[0, \infty)$

b) level curves: $c = \sqrt{x^2 + y^2}$
 $c^2 = x^2 + y^2$, circles of radius c

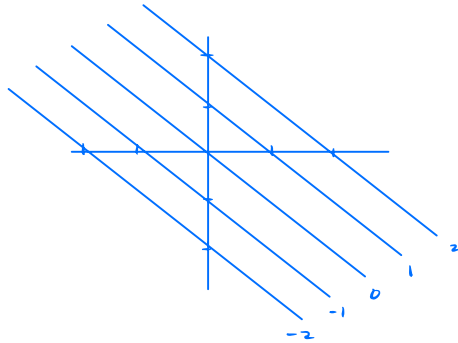


c) the circles have radius c instead of \sqrt{c}
 so they're evenly spaced as c increases



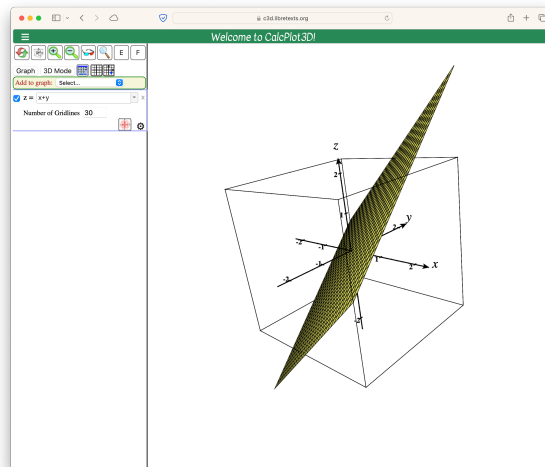
- Problem 2.** Consider the function $f(x, y) = x + y$.
- Make a contour plot using level curves $c = -2, -1, 0, 1, 2$.
 - What do you believe the graph of f looks like?
 - Use CalcPlot3D to make a sketch of the graph of f .

(a) $x + y = c$ is a line with x - and y -intercepts both c

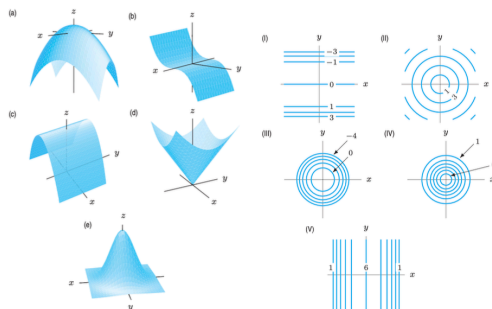


(b) plane

(c)



Problem 3. Match the surfaces (a)-(e) with their corresponding contour diagrams (I)-(V) shown below.



Surface	Contour plot
a	III
b	I
c	V
d	II
e	IV