

§ 6.1 Intro to Bifurcations

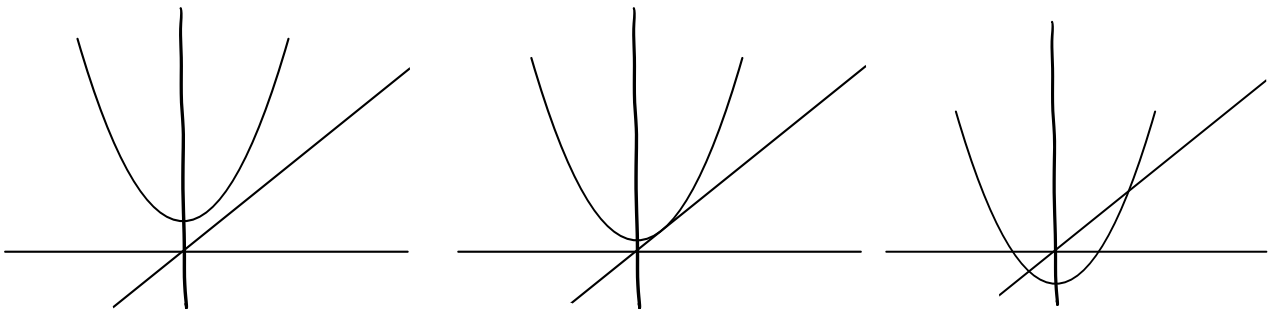
Our aim is to study the family of

functions $Q_c(x) = x^2 + c$ and

understand how the behavior of the dynamics changes when we choose different values for c (c is called a parameter of the system).

Main question How do fixed points change when we change c ?

Observation 1



Notice we go from no fixed points, to one fixed point to 2 as c changes

When this transition occurs, we call this a saddle node bifurcation

Question 1 Find the range of c

values that yield

① no fixed points

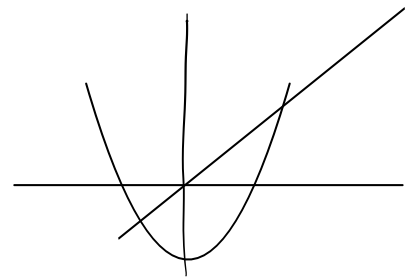
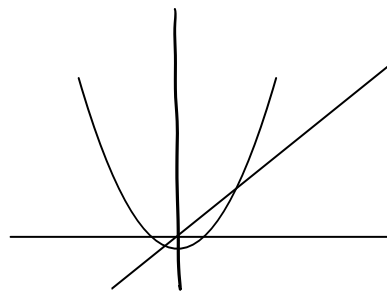
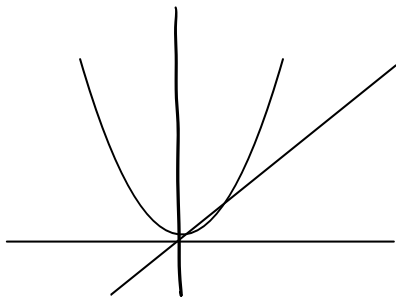
② one fixed point

③ two fixed points

What are the values of the fixed points?

Observation 2 Let's focus on the 2

fixed points range of values.



Q1 $Q_c(x) = x$

$$x^2 + c = x$$

$$x^2 - x + c = 0$$

$$x = \frac{1 \pm \sqrt{1-4c}}{2}$$

Notice there are

(1) no solutions when

$$1-4c < 0$$

$$\Rightarrow c > \frac{1}{4}$$

(2) one solution when

$$1-4c = 0$$

$$\Rightarrow c = \frac{1}{4}$$

(3) two solutions when

$$1-4c > 0$$

$$\Rightarrow c < \frac{1}{4}$$

Therefore, when there are two solutions,

the fixed points are

$$p_- = \frac{1}{2}(1 - \sqrt{1-4c}) \quad \text{and}$$

$$p_+ = \frac{1}{2}(1 + \sqrt{1-4c}).$$

Question 2a What do you notice (graphically) about $Q'_c(x)$ at the fixed points as c changes?

Question 2b Let p_- and p_+ be the left and right fixed points.

- (1) When is p_+ attracting/repelling/neutral?
(which c values)
- (2) When is p_- attracting/repelling/neutral?

Question 2a (1) $Q'(p_+)$ seems to always be greater than 1 (the slope of Q is always greater than the line's slope there)

(2) $Q'(p_-)$ seems to go from positive to 0 to negative to very negative.

Question 2b

Note $Q'(x) = 2x$

$$(1) \quad Q'(p_+) = 2p_+ = 1 + \sqrt{1-4c} > 1$$

for all $c < \frac{1}{4}$

$$(2) \quad Q'(p_-) = 2p_- = 1 - \sqrt{1-4c}$$

We must find c values when

$$|Q'(p_-)| < 1 \quad \text{or} \quad = 1 \quad \text{or} \quad > 1$$

Notice $|Q'(p_-)| < 1$

$$\Leftrightarrow |1 - \sqrt{1-4c}| < 1$$

$$\Leftrightarrow -1 < 1 - \sqrt{1-4c} < 1$$

$$\Leftrightarrow -2 < -\sqrt{1-4c} < 0$$

$$\Leftrightarrow 2 > \sqrt{1-4c} > 0$$

$$\Leftrightarrow 4 > 1-4c > 0$$

$$\Leftrightarrow 3 > -4c > -1$$

$$\Leftrightarrow -\frac{3}{4} < c < \frac{1}{4}$$

- So p_- is
- attracting when $-\frac{3}{4} < c < \frac{1}{4}$
 - neutral when $c = -\frac{3}{4}$
 - repelling when $c < -\frac{3}{4}$.