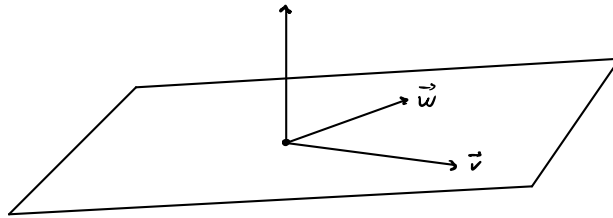


§ 10.4 Cross Product

Goal Given \vec{v} and \vec{w} in \mathbb{R}^3 , form
a new vector that is orthogonal to both.



plane containing \vec{v} and \vec{w}
and a vector orthogonal to both

Preliminary notation $\vec{i}, \vec{j}, \vec{k} \in \mathbb{R}^3$ are the vectors

$$\vec{i} = \langle 1, 0, 0 \rangle, \quad \vec{j} = \langle 0, 1, 0 \rangle, \quad \vec{k} = \langle 0, 0, 1 \rangle$$

Definition Let $\vec{v} = \langle v_1, v_2, v_3 \rangle$, $\vec{w} = \langle w_1, w_2, w_3 \rangle$.

Their cross product is the vector

$$\vec{v} \times \vec{w} = \langle v_2 w_3 - v_3 w_2, -(v_1 w_3 - v_3 w_1), v_1 w_2 - v_2 w_1 \rangle$$

Computational method

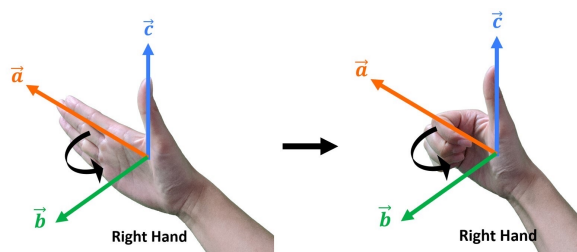
$$\begin{aligned}\vec{v} \times \vec{w} &= \begin{vmatrix} \vec{i} & \vec{j} & \vec{k} \\ v_1 & v_2 & v_3 \\ w_1 & w_2 & w_3 \end{vmatrix} \quad \leftarrow \text{bars mean take} \\ & \quad \text{determinant of} \\ & \quad \text{the matrix} \\ &= \vec{i} \begin{vmatrix} v_2 & v_3 \\ w_2 & w_3 \end{vmatrix} - \vec{j} \begin{vmatrix} v_1 & v_3 \\ w_1 & w_3 \end{vmatrix} + \vec{k} \begin{vmatrix} v_1 & v_2 \\ w_1 & w_2 \end{vmatrix} \quad \leftarrow \text{alternate signs} \\ &= \vec{i} (v_2 w_3 - v_3 w_2) - \vec{j} (v_1 w_3 - v_3 w_1) + \vec{k} (v_1 w_2 - v_2 w_1) \\ &= \langle v_2 w_3 - v_3 w_2, -(v_1 w_3 - v_3 w_1), v_1 w_2 - v_2 w_1 \rangle\end{aligned}$$

Example Let $\vec{v} = \langle 1, 2, 3 \rangle$, $\vec{w} = \langle 4, 5, 6 \rangle$

$$\begin{aligned}\vec{v} \times \vec{w} &= \begin{vmatrix} \vec{i} & \vec{j} & \vec{k} \\ 1 & 2 & 3 \\ 4 & 5 & 6 \end{vmatrix} \\ &= \vec{i} (12 - 15) - \vec{j} (6 - 12) + \vec{k} (5 - 8) \\ &= \langle -3, 6, -3 \rangle\end{aligned}$$

Properties

- ① Right hand rule the vector $\vec{v} \times \vec{w}$ points in the direction your thumb points if you curl your fingers from \vec{v} to \vec{w} with your right hand.



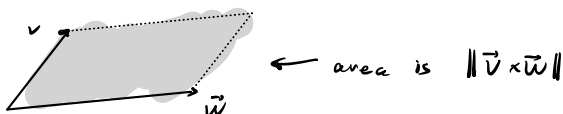
② $\vec{v} \times \vec{w} = -\vec{w} \times \vec{v}$

③ $\vec{v} \times \vec{v} = \vec{0}$

④ $(\vec{v} \times \vec{w}) \cdot \vec{v} = (\vec{v} \times \vec{w}) \cdot \vec{w} = 0$

⑤ $\|\vec{v} \times \vec{w}\| = \|\vec{v}\| \|\vec{w}\| \sin \theta$ where θ is the angle between \vec{v} and \vec{w} .

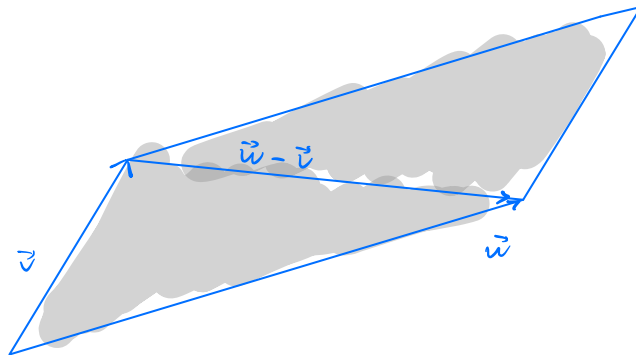
⑥ area of parallelogram formed by \vec{v} and \vec{w} is $\|\vec{v} \times \vec{w}\|$



Example Let $\vec{v} = \langle 1, 1, 2 \rangle$, $\vec{w} = \langle -1, -3, -1 \rangle$

Find ① area of parallelogram formed by \vec{v}, \vec{w}

② area of triangle formed by $\vec{v}, \vec{w}, \vec{w} - \vec{v}$



$$\textcircled{1} \quad \vec{v} \times \vec{w} = \begin{vmatrix} \vec{i} & \vec{j} & \vec{k} \\ 1 & 1 & 2 \\ -1 & -3 & -1 \end{vmatrix}$$

$$= \vec{i}(-1+6) - \vec{j}(-1+2) + \vec{k}(-3+1)$$

$$= \langle 5, -1, -2 \rangle$$

$$\|\vec{v} \times \vec{w}\| = \sqrt{25+1+4} = \sqrt{30}$$

$$\textcircled{2} \quad \frac{1}{2} \|\vec{v} \times \vec{w}\| = \frac{1}{2} \sqrt{30}$$

Problem 1. Compute $\mathbf{v} \times \mathbf{w}$ for each example below.

a. $\mathbf{v} = \langle 3, 2, -2 \rangle, \mathbf{w} = \langle 0, 1, 5 \rangle$

b. $\mathbf{v} = \langle 4, -5, -5 \rangle, \mathbf{w} = \langle 3, 3, 4 \rangle$

c. $\mathbf{v} = \mathbf{i}, \mathbf{w} = \mathbf{j}$

d. $\mathbf{v} = \mathbf{i}, \mathbf{w} = \mathbf{k}$

Problem 2. Without doing additional computation, find $\mathbf{w} \times \mathbf{v}$ in each example of Problem 1.

$$\textcircled{a} \quad \vec{v} \times \vec{w} = \begin{vmatrix} \vec{i} & \vec{j} & \vec{k} \\ 3 & 2 & -2 \\ 0 & 1 & 5 \end{vmatrix} = \langle 12, -15, 3 \rangle$$

$$\vec{w} \times \vec{v} = \langle -12, 15, -3 \rangle$$

$$\textcircled{b} \quad \vec{v} \times \vec{w} = \begin{vmatrix} \vec{i} & \vec{j} & \vec{k} \\ 4 & -5 & -5 \\ 3 & 3 & 4 \end{vmatrix} = \langle -5, -31, 27 \rangle$$

$$\vec{w} \times \vec{v} = \langle 5, 31, -27 \rangle$$

$$\textcircled{c} \quad \vec{i} \times \vec{j} = \vec{k} = \langle 0, 0, 1 \rangle$$

$$\vec{j} \times \vec{i} = -\vec{k} = \langle 0, 0, -1 \rangle$$

$$\textcircled{d} \quad \vec{i} \times \vec{k} = -\vec{j} = \langle 0, -1, 0 \rangle$$

$$\vec{k} \times \vec{i} = \vec{j} = \langle 0, 1, 0 \rangle$$

Problem 3. Find the area of the parallelogram formed by $\mathbf{v} = \langle 1, 1, 1 \rangle$, $\mathbf{w} = \langle 5, 0, 7 \rangle$.

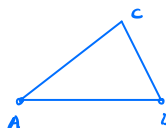
$$\vec{v} \times \vec{w} = \begin{vmatrix} \vec{i} & \vec{j} & \vec{k} \\ 1 & 1 & 1 \\ 5 & 0 & 7 \end{vmatrix} = \langle 7, -2, -5 \rangle$$

$$\|\vec{v} \times \vec{w}\| = \sqrt{49 + 4 + 25} = \sqrt{78}$$

Problem 4. Find the area of the triangle with vertices $A = (0, 1, 0)$, $B = (1, 3, -1)$, and $C = (2, 1, 1)$.

$$\begin{aligned} \vec{v} &= \vec{AB} \\ &= \langle 1, 2, -1 \rangle \end{aligned}$$

$$\begin{aligned} \vec{w} &= \vec{AC} \\ &= \langle 2, 0, 1 \rangle \end{aligned}$$



$$\begin{aligned} \vec{v} \times \vec{w} &= \begin{vmatrix} \vec{i} & \vec{j} & \vec{k} \\ 1 & 2 & -1 \\ 2 & 0 & 1 \end{vmatrix} \\ &= \langle 2, -3, 4 \rangle \end{aligned}$$

$$\begin{aligned} &\frac{1}{2} \|\vec{v} \times \vec{w}\| \\ &= \frac{1}{2} \sqrt{4 + 9 + 16} \\ &= \frac{1}{2} \sqrt{29} \end{aligned}$$